

Switch closed but no energy stored





Overview

Initially, when the switch is closed and $t = 0$, there is no energy stored in the circuit because both capacitors and inductors require time to accumulate energy. Capacitors store electrical energy in the form of an electric field between their plates.

Initially, when the switch is closed and $t = 0$, there is no energy stored in the circuit because both capacitors and inductors require time to accumulate energy. Capacitors store electrical energy in the form of an electric field between their plates.

The energy storage in a switch after it is closed is due to several factors: 1. Capacitive effects in circuit elements lead to temporary energy retention, 2. Inductive components such as coils can momentarily hold energy, 3. Electrical characteristics of the switch itself may create a brief storage.

The initial energy stored in the charged capacitor is: $E_{\text{initial}} = \frac{1}{2} C_1 V^2$ After the switch is closed, the voltage across each capacitor becomes $(V/2)$. The final energy stored in the system is: $E_{\text{final}} = \frac{1}{2} C_1 \left(\frac{V}{2}\right)^2 + \frac{1}{2} C_2 \left(\frac{V}{2}\right)^2$.

In Figure 1, when the switch is closed at $t = 0$, there is no energy stored in the circuit initially. This means that there is no stored electrical energy in any of the components such as capacitors or inductors. In electrical circuits, energy can be stored in various components like capacitors and inductors.

There is no energy stored in the circuit when the switch is closed at $t=0$ in Figure.1. Find the current i_o for $t \geq 0$ Figure. 1The switch in the circuit of Figure. 2 has been in position 1 for a long time. At $t=0$ the switch is thrown to position 2 . There is no initial energy stored in the inductor.

There is initially no current through any circuit element in the following diagram. After the switch has been kept closed for a long time, how much energy is stored in the inductor?

Correct Answer: E Explanation: E After a long time, the current through the



branch containing the inductor increases.

2 - There is no energy stored in the circuit shown when the switch is closed.

a - Find I_2 b - Use initial and final value theorems to find $i_1(0^+)$ and $i_1(\infty)$ c - Find i_1 - Num Engineering 2 - There is no energy stored in the circuit

shown when the switch is closed. a.



Switch closed but no energy stored



Solved There is no energy stored in the circuit shown when

Question: There is no energy stored in the circuit shown when the switch is closed. a- Find i_1 b- Use initial and final value theorem to find $i_1(0^+)$ and $i_1(\infty)$ c- Find i_2 There is no ...

Solved 7.66 There is no energy stored in the capacitors C1

Question: 7.66 There is no energy stored in the capacitors C1 and C2 at the time the switch is closed in the circuit seen in Fig. P7.66 a) Derive the expressions for $v_1(t)$ and $v_2(t)$ for $t \geq 0$.



Solved There is no energy stored in the circuit at the ...

Engineering Electrical Engineering Electrical Engineering questions and answers There is no energy stored in the circuit at the time the switch is closed.

[FREE] There is no energy stored in the circuit in (Figure 1) when ...

The energy stored in an inductor is proportional to the square of the current flowing through it, so as the current builds up, so does the energy



stored in the inductor. ...



Solved There is no energy stored in the circuit in Fig.

Question: There is no energy stored in the circuit in Fig, P8.33 when the switch is closed at $t = 0$. Find $i_o(t)$ for $t \geq 0$. a) For the circuit in Fig. ...



[Solved]: There is no energy stored in the circuit shown when the switch is closed.

There is no energy stored in the circuit shown when the switch is closed. a- Find $I_o(1)$ b- Use initial and final value theorems to find $i_o(t)$ ($0 \leq t < \infty$) and $i_o(\infty)$, solutionspile



Solved 1. There is no energy stored in the circuit. The


Question: 1. There is no energy stored in the circuit. The switch has been closed for a long time before opening at $t=0$. Obtain the expression for the inductor ...





Solved There is no energy stored in the circuit in (Figure

Question: There is no energy stored in the circuit in (Figure 1) at the time the switch is closed. Part A Find $i(t)$ for $t \geq 0$. Previous Answers Request Answer Incorrect; Try Again; 5 ...




Solved 2

See Answer Question: 2- There is no energy stored in the circuit shown when the switch is closed. a- Find I_1 b- Use initial and final value theorem to find $i_1(0^+)$ and $i_1(\infty)$ c- ...

Solved 8.25 There is no energy stored in the circuit ...

Question: 8.25 There is no energy stored in the circuit in Fig. P8.25 when the switch is closed at $t=0$ and $v_o(t)$ for $t \geq 0$ figure P8.25



there is no energy stored in the circuit in (figure 1) when the switch

In circuits with capacitors, energy is stored in the form of electric fields. When the switch is closed, the capacitor begins to charge, and the voltage across it gradually increases. This charging ...



Constants Part A There is no energy stored

A Review , Constants Part A There is no energy stored in the capacitors C1 and C, at the time the switch is closed in the circuit seen in the figure. (Figure 1) ...




Solved b) 10 There is no energy stored in the circuit ...

Question: b) 10 There is no energy stored in the circuit shown in Figure Q1-2 at the time the switch is closed. Find the mathematical expressions for $i(t)$, $v(t)$, ...

Solved 3. There is no energy stored in the circuit at the

Question: 3. There is no energy stored in the circuit at the initial condition. The switch is closed at $t=0$. Find $V_o(t)$ for $t > 0$. $800 \text{ } 0 \text{ } V_o(t) \text{ } 300\text{V } 6.25 \text{ } 1\text{F } \text{HE } 25 \text{ } \text{H}$ Show transcribed image text ...





13.22 There is no energy stored in the circuit in , Chegg

Question: 13.22 There is no energy stored in the circuit in Fig. P13.22 at the time the switch is closed. a) Find v , for $t = 0$. b) Does your solution make sense in terms of known circuit ...

AP Physics C: Electricity and Magnetism Question 24: Answer ...

There is initially no current through any circuit element in the following diagram. After the switch has been kept closed for a long time, how much energy is stored in the inductor?




Question: 2

Question: 2- There is no energy stored in the circuit shown when the switch is closed. a- Find i_2 b- Use initial and final value theorem to find $i_1(0^+)$ and $i_1(\infty)$ c- Find i_1^2 ...

Solved There is no energy stored in the circuit when ...

There is no energy stored in the circuit when the switch is closed at $t = 0$ in Figure.1. Find the current i_0 for $t \geq 0$ Figure. 1 The switch in the circuit of Figure. ...



Solved There is no energy stored in the capacitors C ...

There is no energy stored in the capacitors C and C, at the time the switch is closed in the circuit seen in the figure. (Figure 1) Part A Derive the expression ...

[Energy loss in series capacitors after closing a switch](#)

After closing the switch, the charge redistributes between the two capacitors. I am trying to show that half of the initial energy stored in the capacitors is dissipated. The initial ...



Contact Us

For catalog requests, pricing, or partnerships, please visit:
<https://www.conrad.edu.pl>